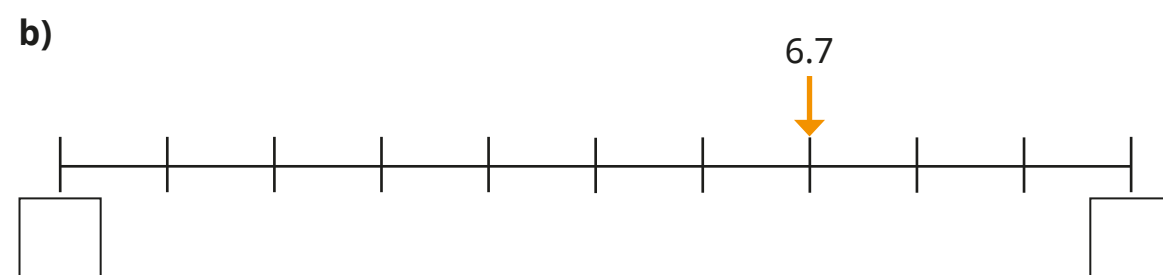
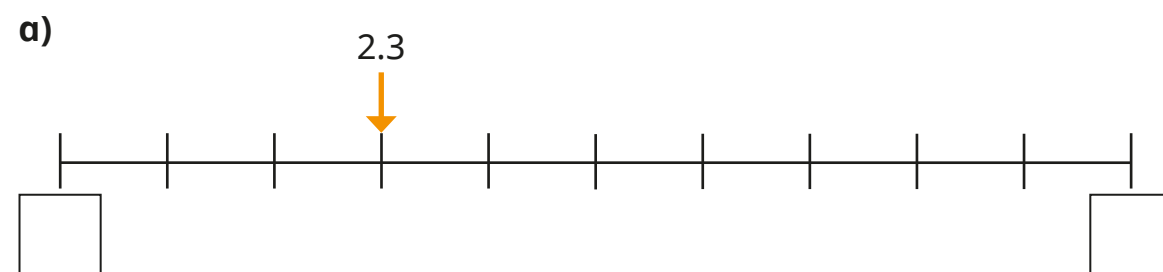
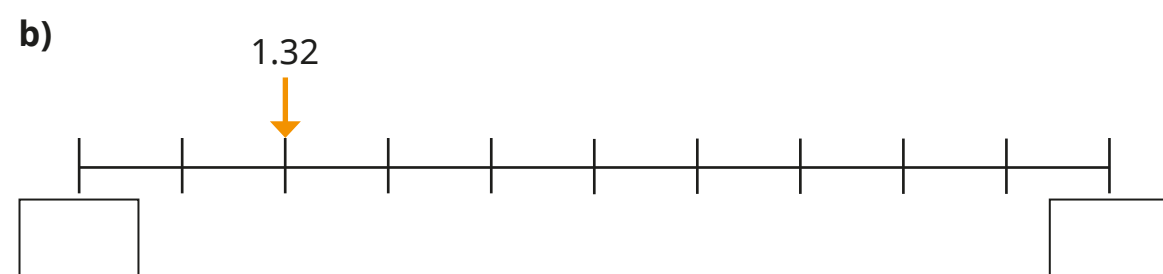
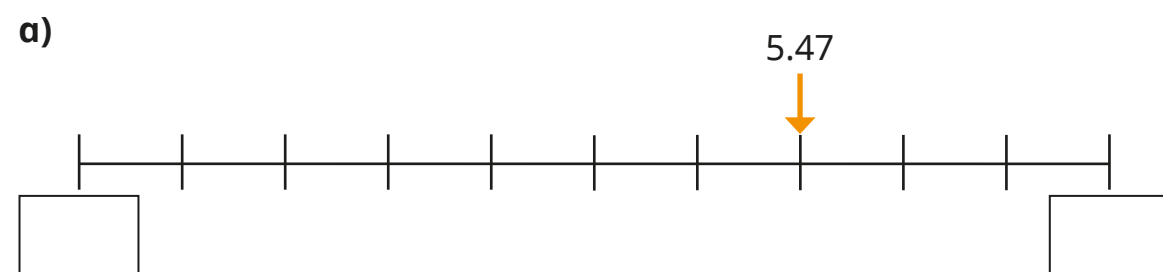


# Round decimals

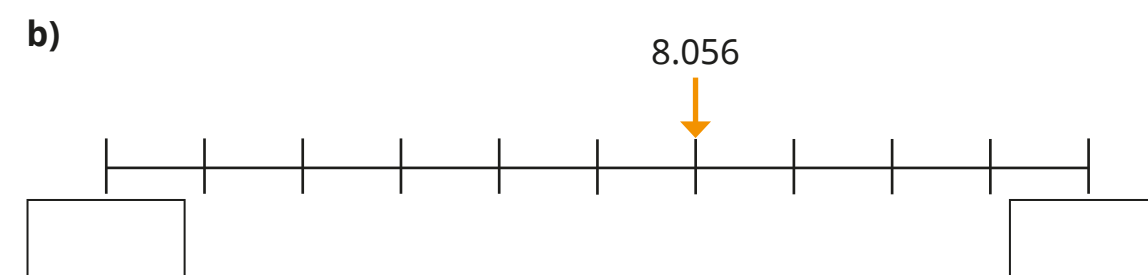
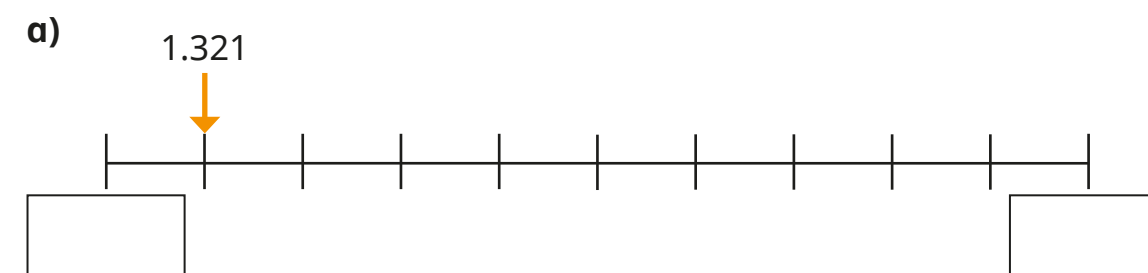
1 Which integers do the decimals lie between?



2 Which tenths do the decimals lie between?



3 Which hundredths do the decimals lie between?

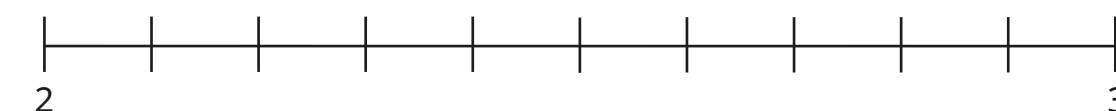


4 Draw an arrow to each number on the number line.

Use the number line to complete the sentences and round each number to the nearest integer.

2.4

2.8



a) 2.4 is closer to  than   
2.4 rounded to the nearest integer is

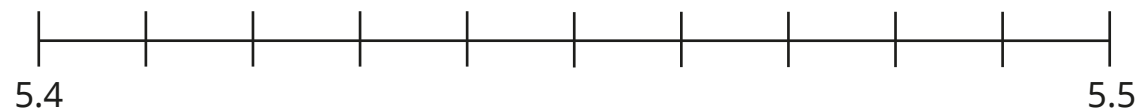
b) 2.8 is closer to  than   
2.8 rounded to the nearest integer is

5 Round each number to the nearest integer.

- a) 5.6  d) 1.5   
 b) 2.9  e) 0.8   
 c) 3.3  f) 0.2

6 Draw an arrow to each number on the number line.  
 Use the number line to complete the sentences and round each number to the nearest tenth.

5.47 5.42



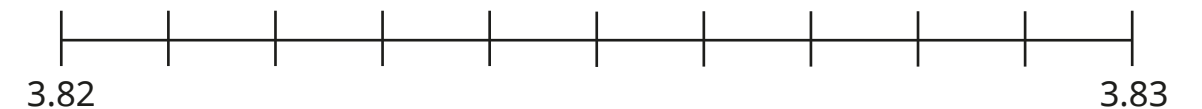
- a) 5.47 is closer to  than   
 5.47 rounded to the nearest tenth is   
 b) 5.42 is closer to  than   
 5.42 rounded to the nearest tenth is

7 Round each number to the nearest tenth.

- a) 5.63  d) 1.57   
 b) 2.92  e) 0.89   
 c) 3.35  f) 0.04

8 Draw an arrow to each number on the number line.  
 Use the number line to complete the sentences and round each number to the nearest hundredth.

3.821 3.828



- a) 3.821 is closer to  than   
 3.821 rounded to the nearest hundredth is   
 b) 3.828 is closer to  than   
 3.828 rounded to the nearest hundredth is

9 Round each number to the nearest hundredth.

- a) 2.094  c) 0.871   
 b) 7.651  d) 1.065

10 Round each number to the nearest integer, tenth and hundredth.

Number	Rounded to the nearest ...		
	integer	tenth	hundredth
7.349			
12.209			
22.745			

Which place value column did you need to look at each time?